

**Hola nois i noies !!**













**Les orientacions d'E.E. no són una feina afegida, només és per ajudar-vos a poder fer el que us recomanen els tutors per no perdre el ritme. És per això que us recordem alguns esquemes o pautes a tenir en compte i que ho faciliten.**

### **Matemàtiques**







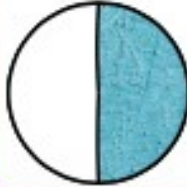


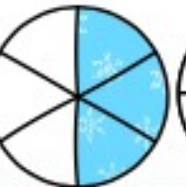


**CONSTRUIM FRACCIONS AMB DIFERENTS MATERIALS (FULLS DE COLORS, CARTOLINES, PLASTILINA, ALIMENTS (GALETES, PIZZES...)):**



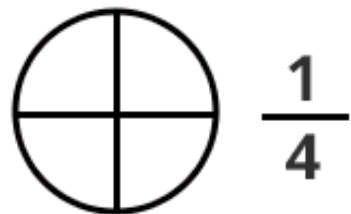
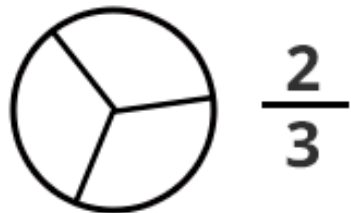
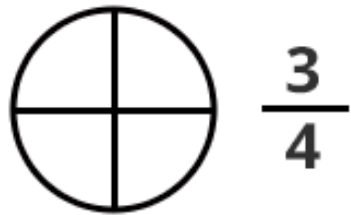
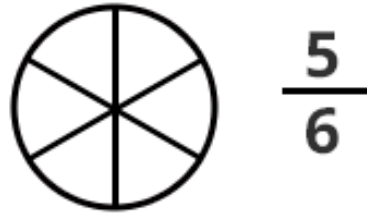
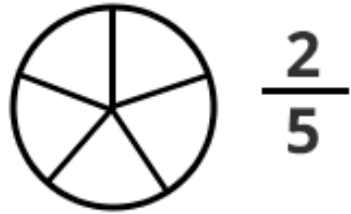
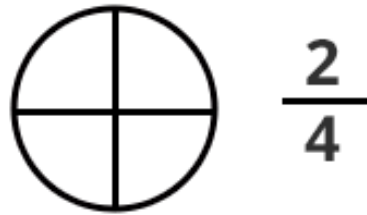
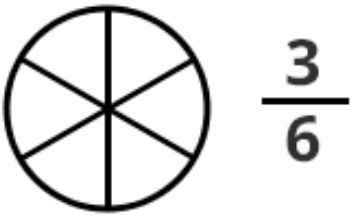
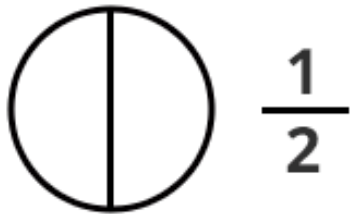
Retalla i enganxa en els quadres la fracció corresponent:

$\frac{3}{9}$		$\frac{3}{6}$		$\frac{8}{9}$	
$\frac{4}{5}$		$\frac{3}{4}$		$\frac{1}{10}$	
$\frac{1}{3}$		$\frac{4}{8}$		$\frac{5}{7}$	
$\frac{3}{9}$		$\frac{3}{3}$		$\frac{1}{2}$	

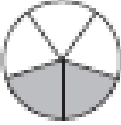

  

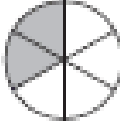
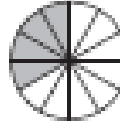
					
					

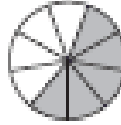

Pinta les fraccions fixant-te en els seus numeradors (nombre de dalt):

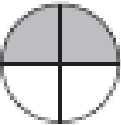
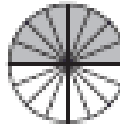


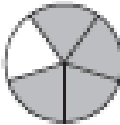
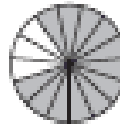
Escriu les següents fraccions:

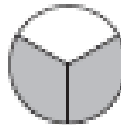
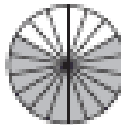
1)  =   
 $\frac{2}{5} = \frac{6}{15}$

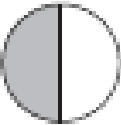
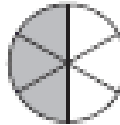
2)  =   
 $\frac{\square}{\square} = \frac{\square}{\square}$

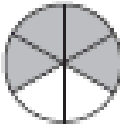
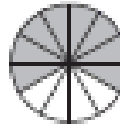
3)  =   
 $\frac{\square}{\square} = \frac{\square}{\square}$

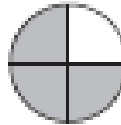
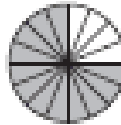
4)  =   
 $\frac{\square}{\square} = \frac{\square}{\square}$

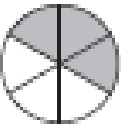
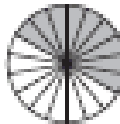
5)  =   
 $\frac{\square}{\square} = \frac{\square}{\square}$

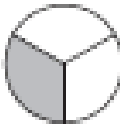
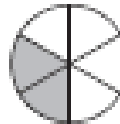
6)  =   
 $\frac{\square}{\square} = \frac{\square}{\square}$

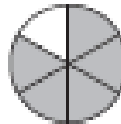
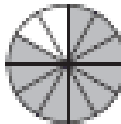
7)  =   
 $\frac{\square}{\square} = \frac{\square}{\square}$

8)  =   
 $\frac{\square}{\square} = \frac{\square}{\square}$

9)  =   
 $\frac{\square}{\square} = \frac{\square}{\square}$

10)  =   
 $\frac{\square}{\square} = \frac{\square}{\square}$

11)  =   
 $\frac{\square}{\square} = \frac{\square}{\square}$

12)  =   
 $\frac{\square}{\square} = \frac{\square}{\square}$

Nom:.....

Data:.....

# Deserts

## El Sahara, el desert més gran del món

El desert del Sahara és el més gran del món. Durant el dia, la temperatura sempre és més alta de 35° C. Hi plou tan poc que és impossible trobar-hi arbres o plantes.

El territori està cobert de grosses **dunes**, és a dir, d'autèntiques muntanyes de sorra blanca i fina. A vegades, al mig d'aquest desert trobem la taca verda d'un **oasi**. Els oasis són llocs on hi ha aigua que surt de sota terra i forma un petit estany. Al voltant s'hi poden trobar palmeres o altres plantes resistents a la calor. També hi ha plantacions.



## Comprensió lectora:

1 Marca, en cada cas, la resposta correcta:

- |   |   |
|---|---|
| a) La temperatura al Sàhara és de:                  | b) La temperatura al llac d'Assal és de:            |
| <input type="checkbox"/> menys de 16° C             | <input type="checkbox"/> 50° C                      |
| <input type="checkbox"/> més de 35° C               | <input type="checkbox"/> 75° C                      |
| <input type="checkbox"/> 50° C                      | <input type="checkbox"/> 35° C                      |
| c) Els àfars bescarvien:                            | d) Els camells són animals:                         |
| <input type="checkbox"/> els camells per sal        | <input type="checkbox"/> que tenen molts geps       |
| <input type="checkbox"/> la sal per camells         | <input type="checkbox"/> molt resistents a la calor |
| <input type="checkbox"/> la sal per roba i aliments | <input type="checkbox"/> que no beuen aigua         |

2 Escribe les semblances i diferències que hi ha entre aquests dos tipus de camells:



S'assemblen en \_\_\_\_\_

\_\_\_\_\_

Es diferencien en \_\_\_\_\_

\_\_\_\_\_

3 Opina: T'agradaria viure en un desert? Per què? \_\_\_\_\_

\_\_\_\_\_



## VOCABULARI

4 Busca en el diccionari el significat de les paraules següents i escriu-lo:

duna \_\_\_\_\_

oasi \_\_\_\_\_

nòmada \_\_\_\_\_